








<b>GRADE: III</b> <b>DATE: 03/10/2024</b>	<b>TERM: I</b> <b>SOCIAL STUDIES</b>	<b>MARK: 40</b> <b>TIME: 2 HOURS</b>
--	---	---

**NAME:**

**CLASS AND SECTION:**

<b>Q. NO</b>	<b>QUESTIONS</b>	<b>MARKS</b>
	<b>SECTION A</b>	
	<b>FILL IN THE BLANKS</b>	
<b>1.</b>	The large landmasses on the surface of the earth.....	<b>1</b>
<b>2.</b>	House should have a proper ..... system to remove dirty water.	<b>1</b>
<b>3.</b>	The exchange or sharing of information, ideas, thoughts or feelings is known as.....	<b>1</b>
<b>4.</b>	..... breed in collected water and spread diseases.	<b>1</b>
<b>5.</b>	..... protect us from the heat, cold, wind and rain.	<b>1</b>
	<b>CHOOSE THE CORRECT ANSWER</b>	
<b>6.</b>	A good environment leads to ..... a) Pollution b) deforestation c) healthy life	<b>1</b>
<b>7.</b>	This is a costly means of transport a) A bicycle b) an Aeroplane c) a steamer	<b>1</b>
<b>8.</b>	This act helps the environment a) Throwing plastic bags in river b) recycling plastic c) Using plastic bags	<b>1</b>
<b>9.</b>	A book of map is called ..... a) A globe b) an atlas c) a dictionary	<b>1</b>

<b>10.</b>	This is a means of personal communication. a) The radio b) the telephone c) the newspaper	<b>1</b>
<b>MATCH THE FOLLOWING</b>		
<b>11.</b>	Land transport	a) artic ocean
<b>12.</b>	House	b) WhatsApp
<b>13.</b>	Smallest ocean	c) fertilizers
<b>14.</b>	Land pollution	d) wood
<b>15.</b>	social media	e) car
<b>WRITE THE FOLLOWING SENTENCES ARE TRUE OR FALSE</b>		
<b>16.</b>	A map shows the features of the earth in greater detail than a globe does.....	<b>1</b>
<b>17.</b>	Cars and motor bikes are better for the environment than bicycle.....	<b>1</b>
<b>18.</b>	Long ago, people rode animals to move from one place to another.....	<b>1</b>
<b>19.</b>	The environment has only living organisms.....	<b>1</b>
<b>NAME THE FOLLOWING</b>		
<b>20.</b>	Name two air transport.....	<b>1</b>
<b>21.</b>	Name two types of houses.....	<b>1</b>
<b>22.</b>	Name two types of pollution.....	<b>1</b>
<b>SECTION B</b>		
<b>ANSWER THE FOLLOWING</b>		
<b>23.</b>	How many oceans are there on the earth? Name them.	<b>3</b>
<b>24.</b>	What is the environment?	<b>2</b>
<b>25.</b>	What materials are required to build a house?	<b>2</b>
<b>DEFINE THE FOLLOWING</b>		
<b>26.</b>	a) Transport b) communication	<b>2</b> <b>2</b>
<b>FIND ME</b>		
<b>27.</b>	I have four wheels and can be different color. You control me with a steering wheel. <b>Who am I?</b>	<b>1</b>

28.	I have many doors, windows and a kitchen and I protect you from the heat, cold, wind and rain. <b>who am I?</b>	<b>1</b>
<b>IDENTIFY THE PICTURES</b>		
29.	 <p>.....</p>	<b>1</b>
30.	 <p>.....</p>	<b>1</b>
31.	 <p>.....</p>	<b>1</b>
32.	 <p>.....</p>	<b>1</b>
33.	 <p>.....</p>	<b>1</b>